

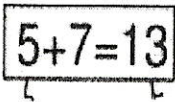

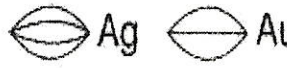
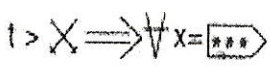
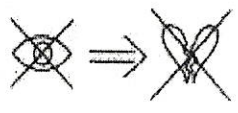

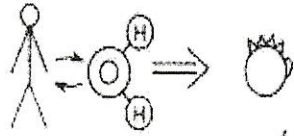
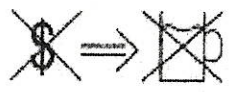
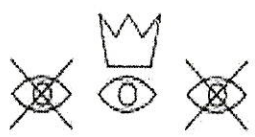
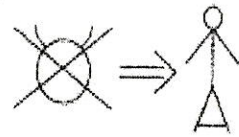

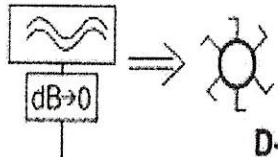
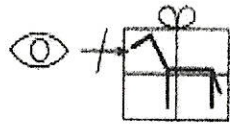
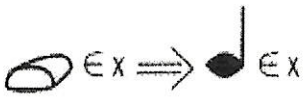


**Zkus se zamyslet a uhodnout,
která známá česká přísloví,
představují níže uvedené rébusy:**

| | | |
|---|--|--|
| <p>1</p>  <p>O+1</p> | <p>2</p>  <p>H+4</p> | <p>3</p>  <p>O+1</p> |
| <p>4</p> <p>100x0 = -V </p> <p>Ř-3</p> | <p>5</p>  <p>Z+1</p> | <p>6</p>  <p>B+1</p> |
| <p>7</p>  <p>S+3</p> | <p>8</p>  <p>T+3</p> | <p>9</p>  <p>Á+3</p> |
| <p>10</p>  <p>H+1</p> | <p>11</p>  <p>D-2</p> | <p>12</p>  <p>Ú+1</p> |
| <p>13</p>  <p>Ř+3</p> | <p>14</p> <p>IQAM > IQPM</p> <p>J+1</p> | <p>15</p>  <p>D-1</p> |
| <p>16</p>  <p>D+4</p> | <p>17</p>  <p>B+1</p> | |